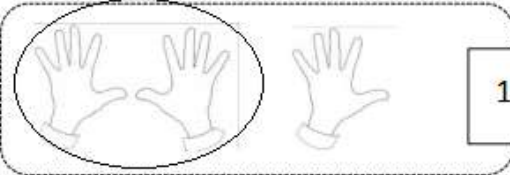





Circle ten. How many tens and ones?

1.  is the same as 1 ten and 5 ones.

2.  is the same as _____ ten and _____ ones.

3.  is the same as _____ one and _____ tens.

4.  is the same as _____ ten and _____ ones.

Carrie has 46 rocks. She can put the rocks in buckets of 10 rocks or lay them on the ground as single rocks. Show the ways that Carrie can sort her rocks. How many ways are there?

_____ buckets _____ separate rocks

Luke has 28 Matchbox cars. To put them away, he can put 10 in a bag or put single cars on the shelf. Show the ways that Luke can put away his cars. How many ways are there?

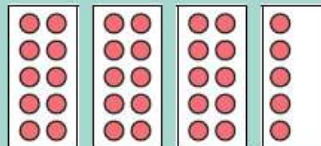
_____ bags _____ single cars

My team had more points than Billy's team and less than Ruby's.

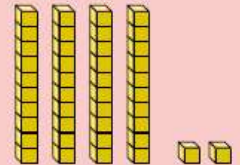


Gavin

Billy's team scored:



Ruby's team scored:



Write 2 different points Gavin's team could have scored:

points

points