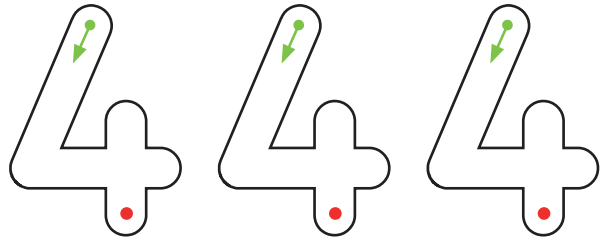




# Number 4:

## Square Like Me Activity

Circle the Numberblock 4 that is square.




4 is 1 more than...?  
Circle the correct Numberblock.



A square has  sides.

A square has  corners.

Can you draw 4  on the ground?

Draw 4 things  
in the ten-frame.
