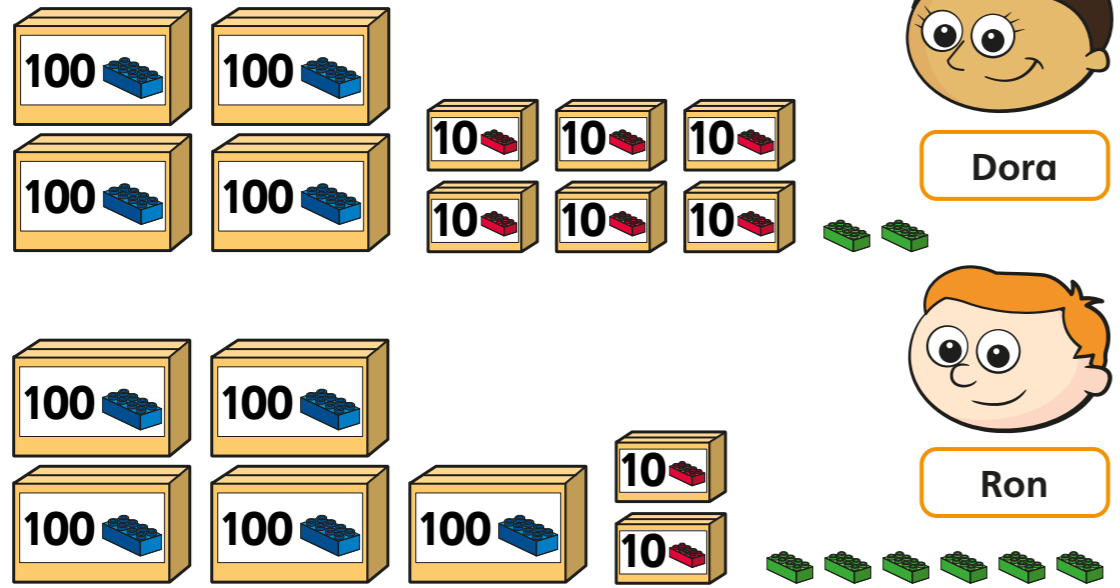


# Compare objects

1 Dora and Ron each have some building bricks.



a) How many bricks does Dora have?

Dora has  bricks

b) How many bricks does Ron have?

Ron has  bricks.

c) Who has the greater number of bricks?

\_\_\_\_\_ has the greater number of bricks.

How do you know?

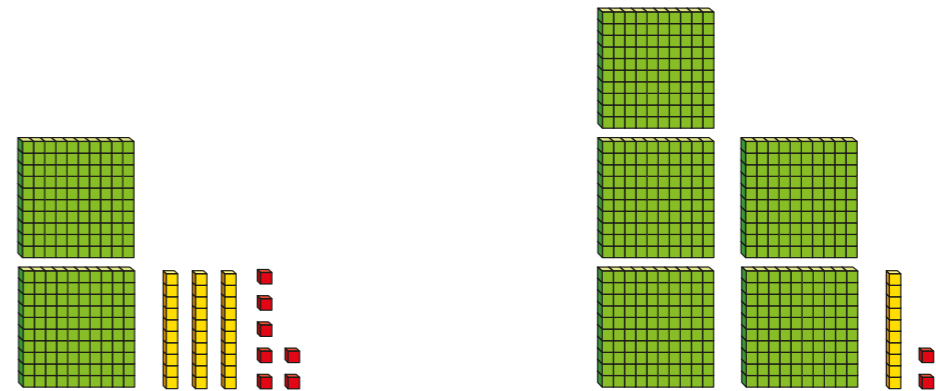
---




---

2 Tick the greater number in each pair.

a)



b)



H	T	O

c)

H	T	O

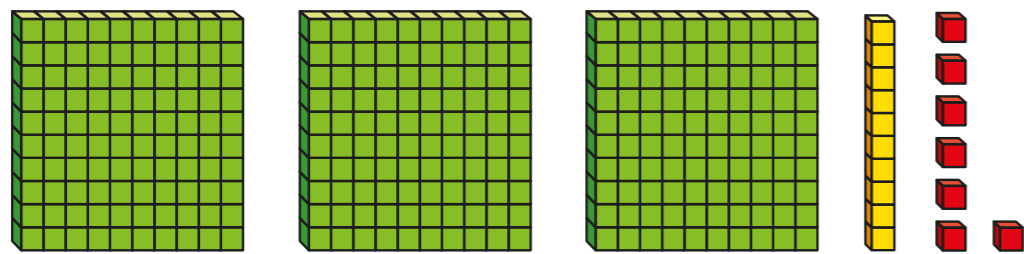
H	T	O

d)


H	T	O

H	T	O

3 Esther makes a number using base 10



Amir also makes a number.



Whose number is greater? Circle your answer.

Esther

Amir

can't tell

Explain how you know.

---



---



---

4 Use 8 pieces of base 10 to make a number.

Compare answers with a partner.

Who has made the greater number?



5 Write  $>$ ,  $<$  or  $=$  to compare the numbers.

a)

H	T	O

○

H	T	O

b)

H	T	O

○

H	T	O

6 Draw 3 more counters to make the statement correct.

H	T	O

<

H	T	O

7 Annie uses 10 counters to make a number greater than 600 but less than 700

What numbers could Annie have made?

Can you find all the possible answers?

