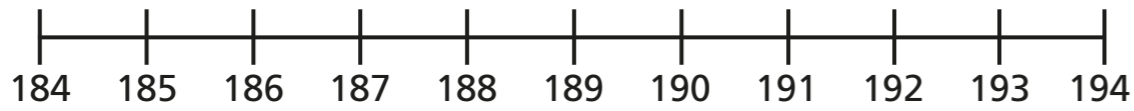
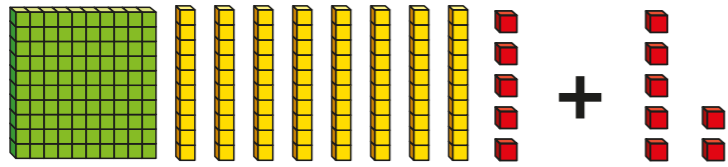


Add 3-digit and 1-digit numbers – crossing 10



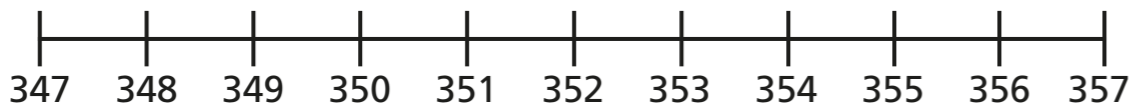
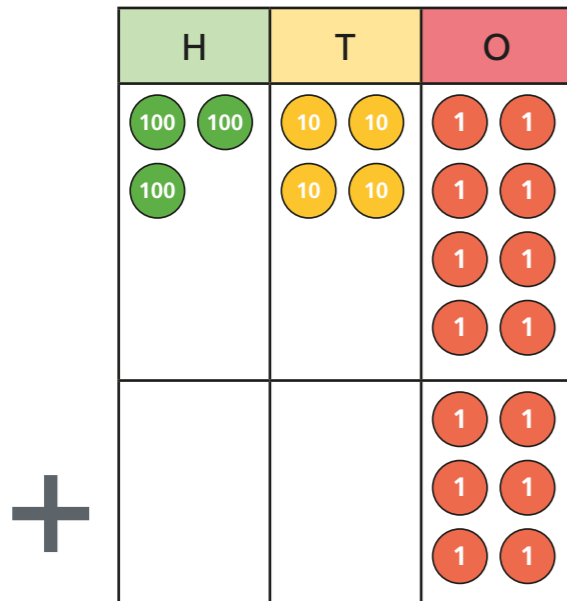
1 a) Work out $185 + 7$



$185 + 7 =$

How did you work this out?

b) Work out $348 + 6$

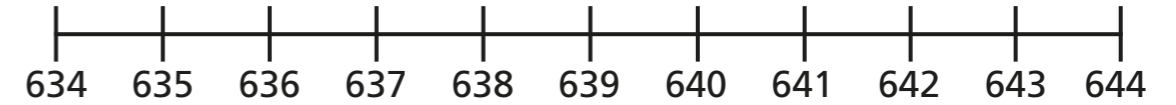


$348 + 6 =$

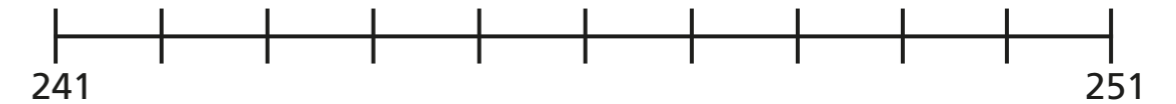
2 Work out these additions.

Use two jumps on the number lines.

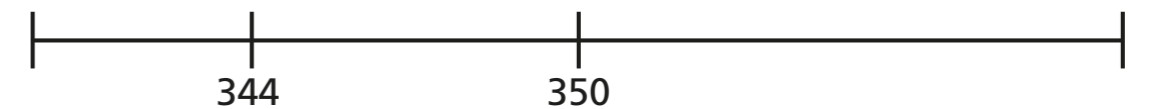
a) $635 + 8 =$



b) $242 + 9 =$



c) $344 + 7 =$



3 Work out the additions.

a) $295 + 6 =$

c) $8 + 424 =$

b) $662 + 8 =$

d) $= 825 + 9$

- 4 a) Circle the calculations with an answer that ends in a zero.

$426 + 6$

$422 + 5$

$427 + 3$

$429 + 1$

$420 + 8$

$423 + 7$

- b) Write the missing digits.


$376 + \square = 380$

$53_ + 5 = 540$

$219 + \square = 220$

$2 + 65_ = 660$

5



When you add a 3-digit and a 1-digit number together, only the ones digit in the 3-digit number will change.

Is Whitney correct? _____

Explain your answer.

- 6 Work out the missing digits.

a) $34_ + 7 = 352$

d) $9 + 17_ = 1_8$

b) $725 + \square = 731$

e) $34_ + 7 = 3_5$

c) $45_ + 3 = 462$

f) $__5 + 8 = 323$



- 7 Arrange the digit cards to make a sum where the answer is a multiple of 5



Find 4 different sums.

<input type="text"/>	<input type="text"/>	<input type="text"/>	+	<input type="text"/>	=	<input type="text"/>
<input type="text"/>	<input type="text"/>	<input type="text"/>	+	<input type="text"/>	=	<input type="text"/>
<input type="text"/>	<input type="text"/>	<input type="text"/>	+	<input type="text"/>	=	<input type="text"/>
<input type="text"/>	<input type="text"/>	<input type="text"/>	+	<input type="text"/>	=	<input type="text"/>

- 8 Mo has £232 in his bank account.
 Rosie has £237 in her bank account.
 Mo puts £9 into his bank account.
 Rosie puts some money into her account.
 Now they both have the same amount of money.
 How much did Rosie put into her account?

