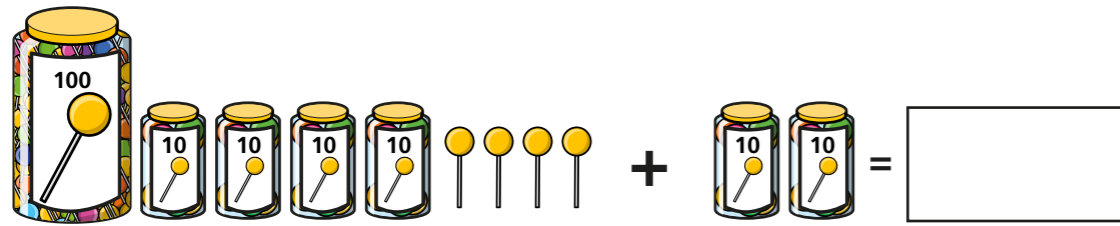


Add and subtract 3-digit and 2-digit numbers – not crossing 100

1 How many lollipops are there in total?



2 Eva has made this number.

Hundreds	Tens	Ones

a) What number has Eva made?

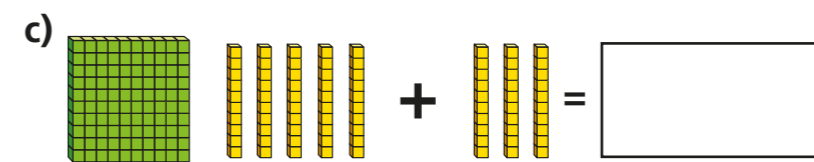
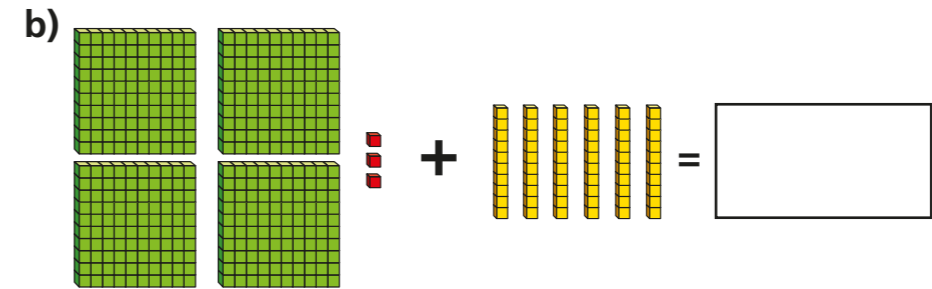
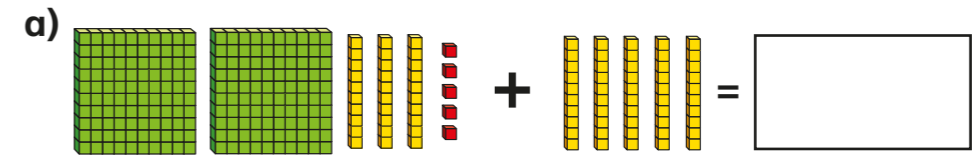
b) Eva subtracts 40 from her number.

Write a subtraction to show what Eva has done.

-

c) What is the answer to the subtraction?

3 Complete the additions.



4 Use base 10 to help you complete the number sentences.

a) $146 + 30 =$

b) $146 - 30 =$

c) $146 + 50 - 50 =$

5 Use the place value chart to help you complete the number sentences.

H	T	O

a) $742 + 30 =$

b) $742 - 30 =$

c) $742 + 50 =$

d) $742 - 20 =$

e) $20 + 742 =$

f) $= 742 - 40$

6 Complete the calculations.

a) $717 + 30 =$

$717 + 40 =$

$717 + 60 =$

$80 + 717 =$

What do you notice?

b) $182 - 30 =$

$587 - 30 =$

$282 - 30 =$

$380 - 30 =$

What do you notice?



7 Here is a subtraction.

$487 - 50 = 482$

What mistake has been made?

8 Complete the number sentences.

a) $196 - 30 =$

b) $241 + 40 =$

c) $511 - 10 =$

d) $725 + 50 =$

e) $60 + 927 =$

f) $- 40 = 255$

g) $= 827 + 20$

h) $487 -$ $= 417$

i) $392 -$ $= 302$

j) $+ 50 = 277$

k) $+ 913 = 953$

l) $429 -$ $= 429$

9 Here is a calculation with three missing digits.

$726 + _0 - _0 = 7_6$

All the missing digits are different.

What could the calculation be?

How many calculations can you find?

